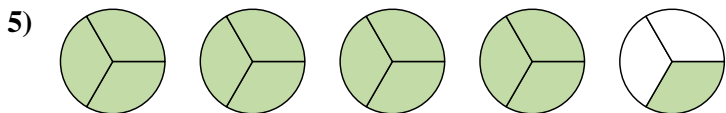
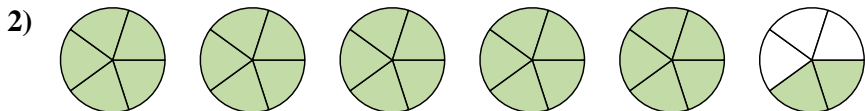
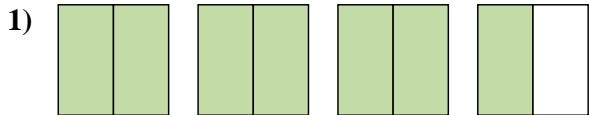
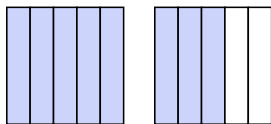
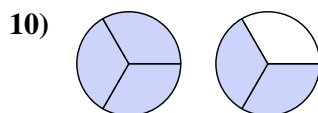
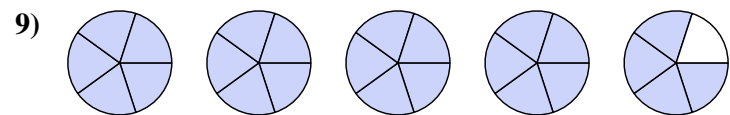
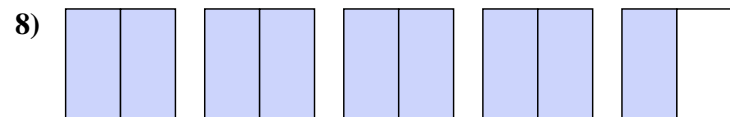
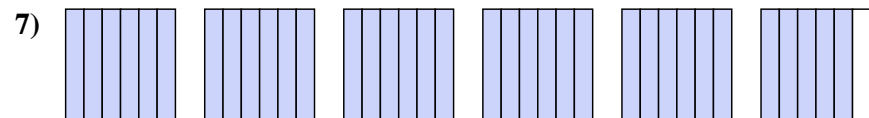
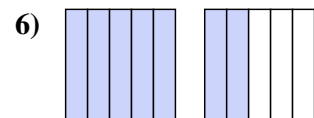




Write each amount as a mixed number.



Write each amount as an improper fraction.



Answers

1. $3\frac{1}{2}$

2. $5\frac{2}{5}$

3. $1\frac{1}{6}$

4. $1\frac{3}{6}$

5. $4\frac{1}{3}$

6. $\frac{7}{5}$

7. $\frac{35}{6}$

8. $\frac{9}{2}$

9. $\frac{24}{5}$

10. $\frac{5}{3}$

11. $\frac{8}{5}$